

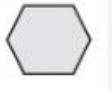
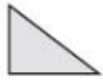






Date: 20/10/2022  
GRADE: III

TERM 1 (2022-23)  
MATHEMATICS

Max marks: 40  
Time: 2 hours

Name :

Q.No.	Questions	Mark
	<b>MULTIPLE CHOICE QUESTIONS</b> (Choose the correct answer from the given options)	
1	How many corners does this shape have?  a. 8 b. 6 c. 5 d. 7	1
2	Which of the following is a 3D shape ? a.  b.  c.  d. 	1
3	How many pieces are there in a tangram? a. 7 b. 8 c. 5 d. 6	1
4	Arrangement of shapes without leaving a gap is called a. Map b. Tiling c. Diagonal d. Reflection	1
5	What is the face value of 6 in 769 ? a. 6 b. 10 c. 60 d. 600	1
6	What is the place value of 5 in 567 ? a. 6 b. 10 c. 60 d. 600	1
7	Choose the number: Six hundred eight a. 680 b. 688 c. 608	1

	<b>d. 6008</b>													
8	Choose the number name: 470 a. Four hundred seventeen b. Four hundred seventy c. Seven hundred forty <b>d. Seven hundred fourteen</b>	1												
9	Add 435 and 321.	1												
10	Subtract 320 from 567.	1												
11	Add <table border="1" style="margin-left: 20px;"> <tr> <td></td> <td>H</td> <td>T</td> <td>O</td> </tr> <tr> <td>·</td> <td>4</td> <td>3</td> <td>7</td> </tr> <tr> <td>+</td> <td>5</td> <td>4</td> <td>3</td> </tr> </table>		H	T	O	·	4	3	7	+	5	4	3	1
	H	T	O											
·	4	3	7											
+	5	4	3											
12	Find the difference of 578 and 777	1												
	<b>FILL IN THE BLANK</b>													
13	A circle has ..... edges	1												
14	A line joining two opposite corners of the shape is called .....	1												
15	..... is the largest three digit number.	1												
16	The predecessor of 345 is .....	1												
17	$400 + 100 = \dots\dots\dots$	1												
	<b>YES OR NO</b>													
18	A triangle has two corners.	1												
19	Arrange the numbers from smallest to the greatest is called ascending ordering.	1												
20	183 is nearer to 180 than to 190.	1												
	<b>VERY SHORT ANSWER TYPE QUESTIONS</b>													
21	Write the number of edges and corners of the following figure:  Edges = ..... Corners = .....	2												
22	Draw a rectangle and its diagonals.	2												
23	Arrange the numbers in ascending order: 678 , 786, 876 , 687	2												
24	Form the greatest and the smallest number using the digits 4, 2 and 6	2												
25	Round the number 678 to the nearest hundred.	2												
	<b>SHORT ANSWER TYPE QUESTIONS</b>													
26	Complete the pattern: 320, 330, ....., ....., ....., ....., .....	3												
27	Find out the estimated difference to the nearest hundred: 485-210	3												
	<b>LONG ANSWER TYPE QUESTION</b>													
28	A farm growing medicinal herbs has 471 tulsi plants and 355 ginger plants. How many medicinal herbs does the farm have in all?	4												